

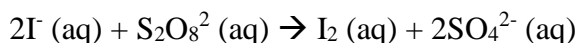
مباراة الدخول 2020 – 2021  
مسابقة في الكيمياء – Series A

عدد الصفحات: ٥

المدة : ٤٥ دقيقة

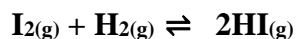
For each of the following questions circle the right answer. (Only one answer is correct)

1. We perform the oxidation of iodide ions  $I^-$  with the peroxydisulfate ions  $S_2O_8^{2-}$ , this reaction is slow and complete. (1pt)



- The curve  $n(I^-) = f(t)$  is ascendent.
- The curve  $n(I_2) = f(t)$  is descendent.
- The curve  $n(I_2) = f(t)$  is ascendent.
- The curve  $n(S_2O_8^{2-}) = f(t)$  is ascendent.

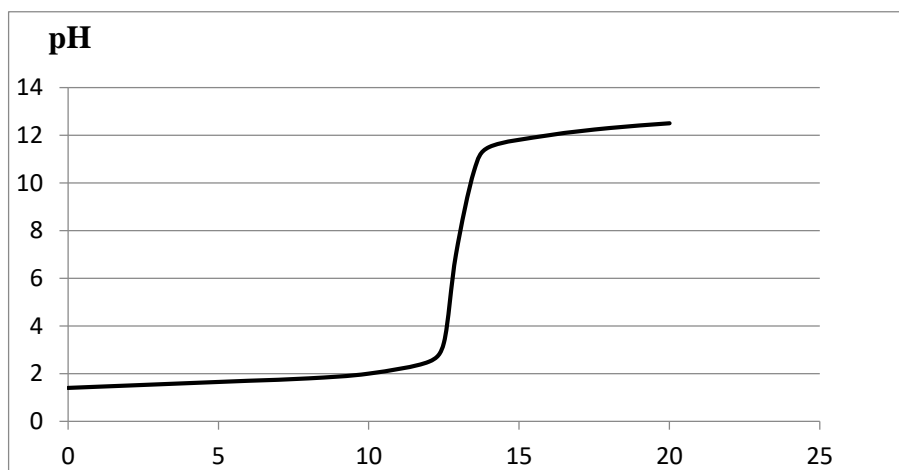
2. For the following equilibrium the forward reaction is exothermic: (1pt)



At a temperature  $T_1 < T_2$ :

- $\alpha_2 < \alpha_1$ .
- $\alpha_2 > \alpha_1$ .
- $\alpha_2 = \alpha_1$ .
- None of the above.

3. A volume  $V_a$  of a  $Ca$  ( $mol.L^{-1}$ ) solution of sulfamic acid is taken and titrated with a solution of sodium hydroxide  $NaOH$ , the results obtained give the curve below: (1pt)



- a. Sulfamic acid is a strong acid since the curve shows one inflection point and  $\text{pH}_E = 7$ .
- b. Sulfamic acid is a strong acid since  $C_a = 10^{-2} \text{mol.L}^{-1}$  and  $\text{pH}_E = 7$ .
- c. Sulfamic acid is a weak acid since  $C_a < 10^{-2} \text{mol.L}^{-1}$  and  $\text{pH}_E > 7$ .
- d. Sulfamic acid is a weak acid since the curve shows two inflection point and  $\text{pH}_E < 7$ .

4. In the case of the colorimetric titration of a weak acid by a sodium hydroxide solution, it is necessary to choose an indicator whose change range zone is: (1pt)

- a. Between 7 and 10.
- b. Between 6 and 7.
- c. Between 4 and 6.
- d. Between 3 and 5.

5. Quantitative organic analysis of compound A formed of C, H and O gave the following mass percentages: C = 60% and H = 13.3%. Knowing that the molar mass of A is  $60 \text{g.mol}^{-1}$ , the molecular formula of A is: (1pt)

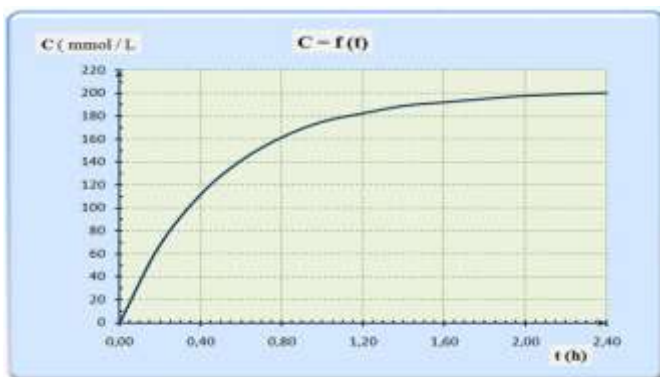
- a.  $\text{C}_4\text{H}_{10}\text{O}$ .
- b.  $\text{C}_3\text{H}_8\text{O}$ .
- c.  $\text{C}_3\text{H}_6\text{O}$ .
- d.  $\text{C}_4\text{H}_8\text{O}_2$

Molar atomic mass in  $\text{g.mol}^{-1}$  : C=12, O=16 and H=1

6. A dilution is carried out by using a commercial hydrogen peroxide solution  $S_0$  of molar concentration  $C_0 = 7.5 \text{ mol. L}^{-1}$ . The solution  $S_0$  is diluted 125 times in order to prepare a solution S of volume 1 L. The glassware needed to achieve this dilution are: (1.5pt)

- a. 10 mL graduated pipette and 1000 mL volumetric flask.
- b. 10 mL volumetric pipette and 1L volumetric flask.
- c. 5 mL graduated pipette and 1000 mL volumetric flask.
- d. 8 mL graduated cylinder and 1L volumetric flask.

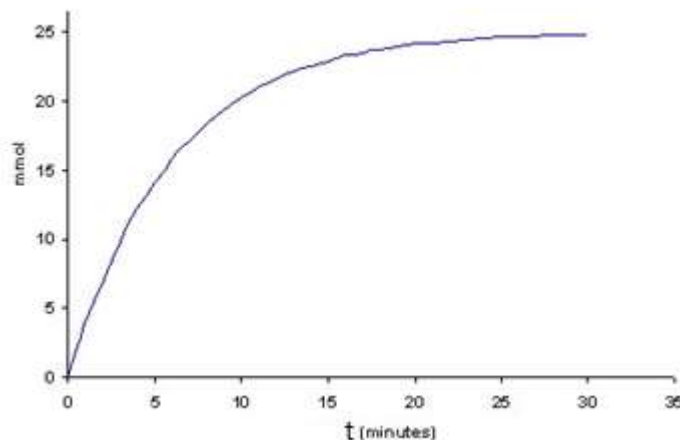
7. (1.5pt)



According to the curve:

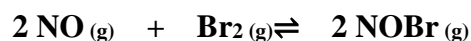
- The initial rate of the reaction is less than the rate of reaction at time  $t = 2$  hours
- The initial rate of the reaction is twice than the rate of reaction at time  $t = 2$  hours
- The initial rate of the reaction is equal to the rate of reaction at time  $t = 2$  hours
- The rate of the reaction at time  $t = 2$  hours is equal to zero

8. For the system of the following graph ( $n$ ) mole =  $f(t)$  that shows the maximum number of moles of product formed when the corresponding reaction ends at  $t=30$  min, the half-life time of this reaction is approximately: (1.5pt)



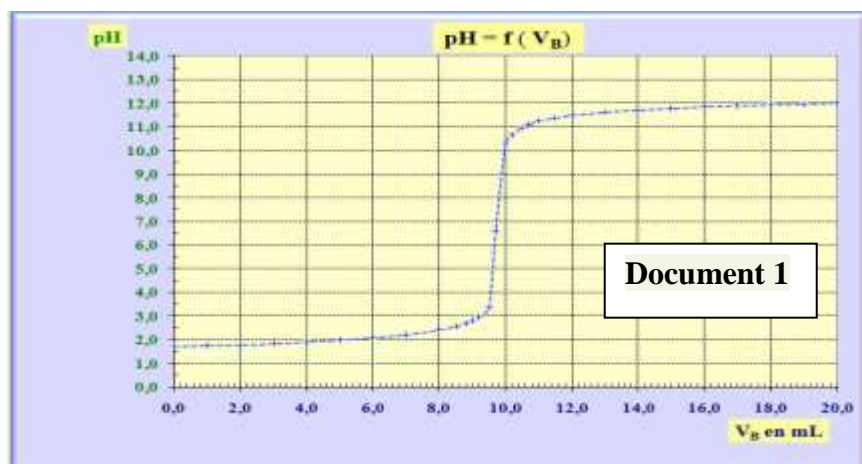
- 2 minutes.
- 15 minutes.
- 5 minutes.
- 10 minutes.

9. In a bulb of volume 15L, we introduce 0.6mol of nitrogen monoxide **NO** and 0.3mol of bromine gas **Br<sub>2</sub>** at a temperature  $t_1 = 700^\circ\text{C}$ . The following equilibrium is established: (1.5pt)



At equilibrium the total number of moles of gaseous mixture is 0.85mol.

- The equilibrium constant  $K_c = 2.4$
  - The equilibrium constant  $K_c = 4.2$
  - The equilibrium constant  $K_c = 24$
  - The equilibrium constant  $K_c = 42$
10. The curve below (**Document 1**) shows the evolution of the pH as a function of the volume of sodium hydroxide solution of concentration  $C_b$  poured for the titration of a 20mL of  $0.1\text{mol.L}^{-1}$  hydrochloric acid solution. (1.5pt)



- a.  $C_b = 0.1 \text{ mol.L}^{-1}$ .
- b.  $C_b = 0.2 \text{ mol.L}^{-1}$ .
- c.  $C_b > 0.1 \text{ mol.L}^{-1}$ .
- d.  $C_b > 0.2 \text{ mol.L}^{-1}$ .

11. We dissolve an acid HA ( $C_a = 10^{-3} \text{ mol.L}^{-1}$ ) in water. The pH of the solution obtained is  $\text{pH} = 3.9$ . The value of the  $K_a$ , the acidity constant is (1.5pt)

- a.  $10^{-1}$ .
- b.  $< 10^{-1}$ .
- c.  $> 10^{-1}$ .
- d.  $10^{-3}$ .

12. Given :  $\text{p}K_a(\text{NH}_4^+/\text{NH}_3) = 9.2$  ;  $\text{p}K_a(\text{CH}_3\text{COOH}/\text{CH}_3\text{COO}^-) = 4.8$  (1.5pt)

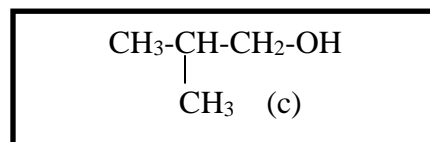
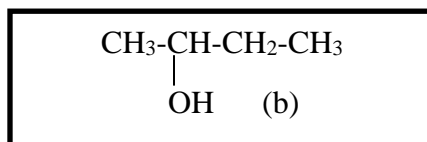
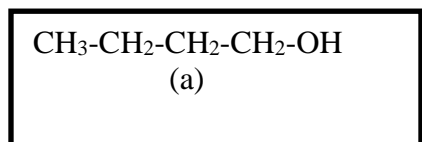
- a. The base  $\text{NH}_3$  is stronger than the base  $\text{CH}_3\text{COO}^-$
- b. The acid  $\text{NH}_4^+$  is stronger than the acid  $\text{CH}_3\text{COOH}$
- c.  $\text{NH}_4^+$  and  $\text{CH}_3\text{COOH}$  are two strong acids
- d.  $\text{NH}_3$  and  $\text{CH}_3\text{COO}^-$  are two strong bases

13. Two solutions  $S_1$  and  $S_2$  of acid of concentration  $C$  are available. These solutions are then diluted 100 times. The pH is measured before and after dilution (**Document 1**). (1.5pt)

	$C$	$C / 100$
<b>pH of <math>S_1</math></b>	2	4
<b>pH of <math>S_2</math></b>	3	4.5
<b>Document 1</b>		

- Both acids are strong.
- The concentration  $C$  of the solution  $S_1$  is  $0.01 \text{ mol.L}^{-1}$ .
- Both acids are weak.
- The acid of solution  $S_2$  is stronger than the acid of solution  $S_1$ .

14. Given the following condensed structural formula of the alcohol of formula  $C_4H_{10}O$ : (1.5pt)



- (a) and (c) are positional isomers.
  - (a) and (c) are secondary alcohols.
  - (b) is the functional isomer of (a).
  - The name of the tertiary alcohol isomer of (a), (b) and (c) is 2-methyl,2-propanol.
15. One mole of ethanol reacts with 2 moles of ethanoic acid to an ester. The percentage yield of this esterification is: (1.5pt)
- 5%
  - 60%
  - 67%
  - 80%

**N.B :** In an equimolar mixture of alcohol and an acid the % yield of esterification is:

- 67% if the alcohol is primary.
- 60% if the alcohol is secondary.
- 5% if the alcohol is tertiary.

**Good Luck**